

THE LEARNING ACADEMY

SPATIAL REASONING

Practice Test 1


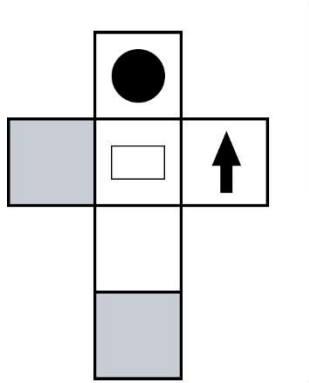


Published by The Learning Academy. All rights reserved. No part of this publication may be photocopied, reproduced, stored or transmitted in any form or by any means without written permission of the publisher.

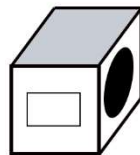
SECTION 3: NET OF CUBES

Work out which of the cubes on the right can be made from the net on the left-hand side. Mark the letter on the answer sheet.


PRACTICE QUESTION 1




A



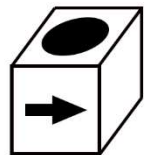
B



C



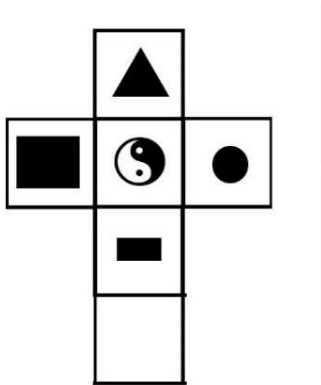
D



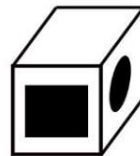
E

Answer: A

PRACTICE QUESTION 2



A



B



C



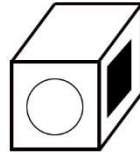
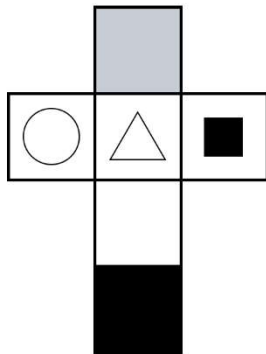
D



E

Answer: C

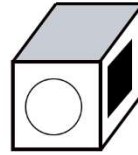
1.



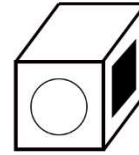
A



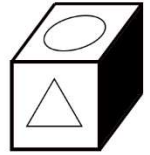
B



C

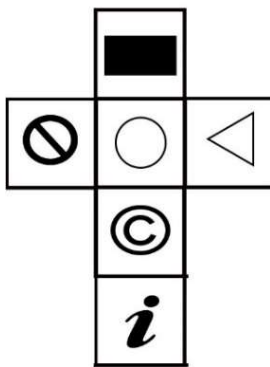


D



E

2.



A



B



C




D



E

3.



A



B



C



D



E