

THE LEARNING ACADEMY

**NON-VERBAL & SPATIAL
REASONING**

Practice Test 1




Published by The Learning Academy. All rights reserved. No part of this publication may be photocopied, reproduced, stored or transmitted in any form or by any means without written permission of the publisher.

SECTION 1


ROTATIONS

Which shape on the right is a rotation of the shape on the left?


PRACTICE QUESTION 1




A




B




C



D



E



F

Answer: A

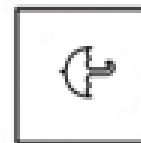
PRACTICE QUESTION 2



A



B



C



D



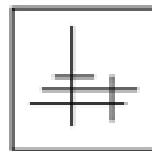
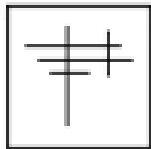
E



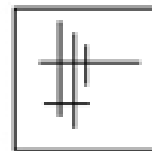
F

Answer: F

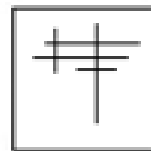
1.



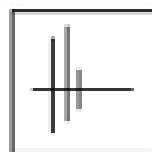
A



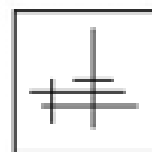
B



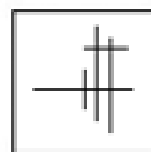
C



D

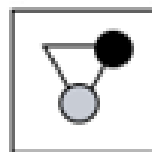
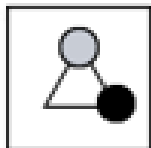


E

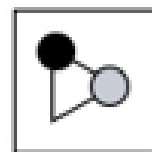


F

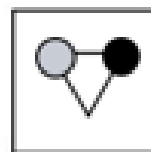
2.



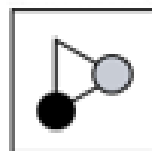
A



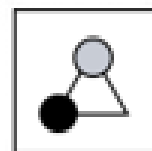
B



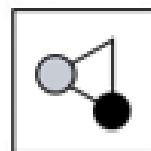
C



D

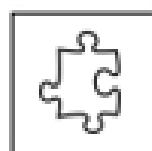
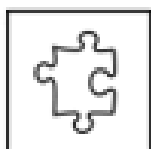


E




F

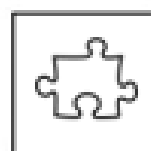
3.



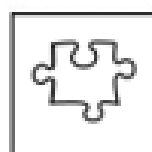
A



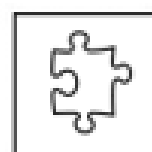
B



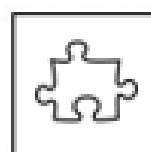
C



D



E

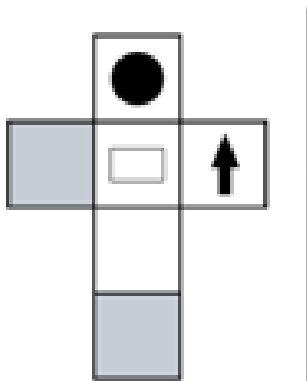


F

SECTION 3: NET OF CUBES

Work out which of the cubes on the right can be made from the net on the left-hand side.
Mark the letter on the answer sheet.

PRACTICE QUESTION 1



A

B


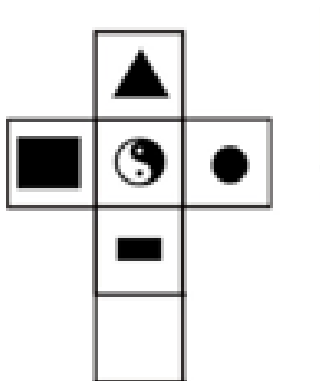
C

D

E

Answer: A

PRACTICE QUESTION 2



A

B

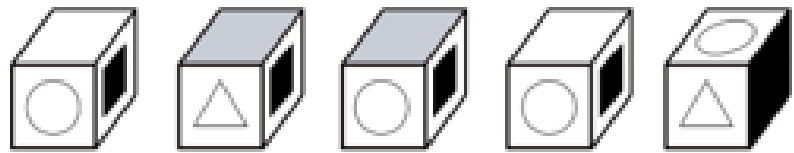
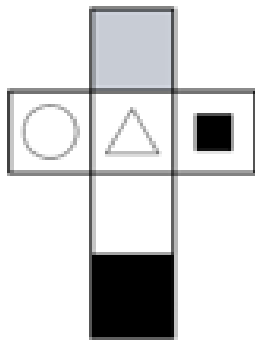
C

D

E

Answer: C

25.



A

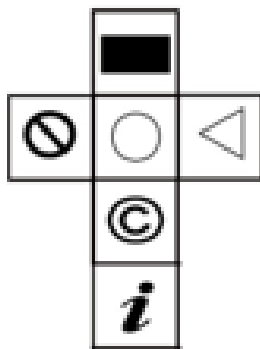
B

C

D

E

26.



A

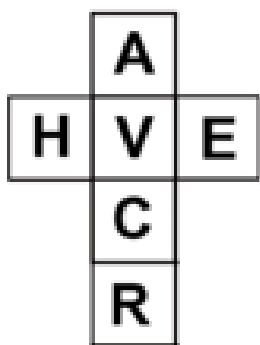
B

C

D

E

27.



A

B

C

D

E